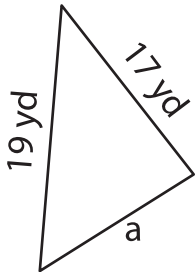


Missing Side

Find the missing side.

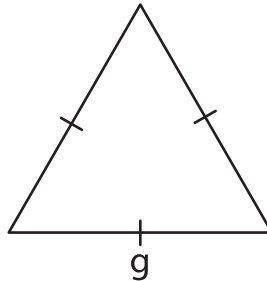
1)



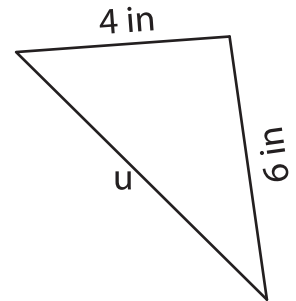
Perimeter = 52 yd

a = _____

2)



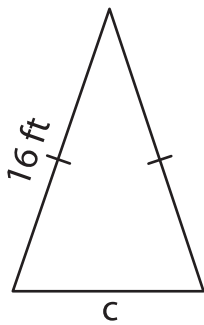
3)



Perimeter = 19 in

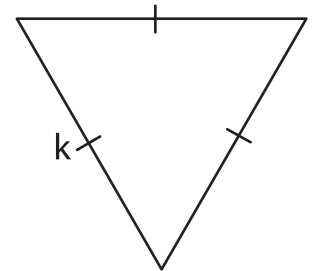
u = _____

4)



Perimeter = 42 ft

c = _____



Perimeter = 42 yd

k = _____

7) Each of the two equal sides of an equilateral triangle is 51 feet, what is the perimeter of the triangle?

8) The perimeter of a triangle is 48 inches. If the lengths of two sides are 20 inches and 17 inches, find the length of the other side of the triangle.

PREVIEW

Gain complete access to the largest collection of worksheets in all subjects!

Members, please log in to download this worksheet.

Not a member? Please sign up to gain complete access.

www.mathworksheets4kids.com