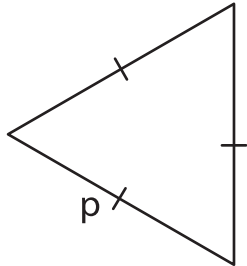


**Missing Side**

Find the missing side.

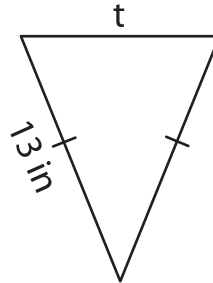
1)



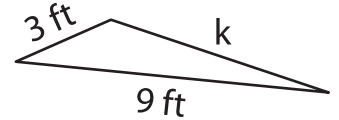
Perimeter = 66 yd

$p =$  \_\_\_\_\_

2)



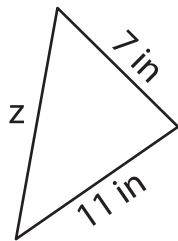
3)



Perimeter = 19 ft

$k =$  \_\_\_\_\_

4)



Perimeter = 33 in

$z =$  \_\_\_\_\_

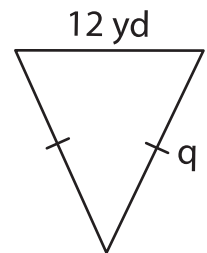
**PREVIEW**

Gain complete access to the largest collection of worksheets in all subjects!

Members, please log in to download this worksheet.

Not a member? Please sign up to gain complete access.

[www.mathworksheets4kids.com](http://www.mathworksheets4kids.com)



Perimeter = 40 yd

$q =$  \_\_\_\_\_

7) The perimeter of a triangle is 45 yards, and two of its sides are 22 yards and 17 yards, what is the length of the third side?

\_\_\_\_\_

8) If the perimeter of an equilateral triangle is 30 inches, determine the length of each side.

\_\_\_\_\_