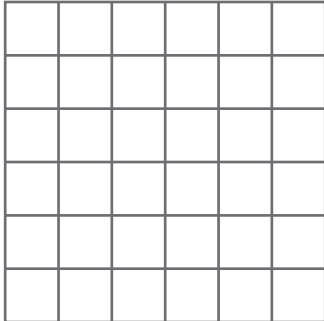



Draw any shape in each grid with the following perimeter.

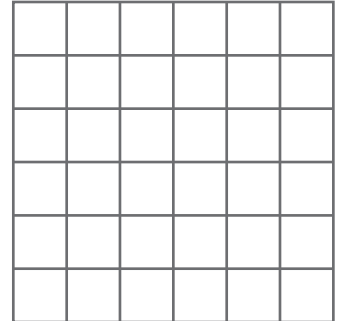
1) Perimeter = 16 units



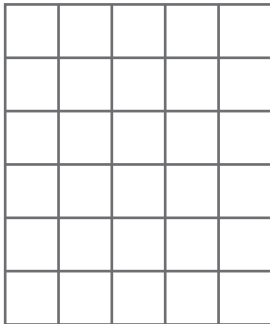
2) Perimeter = 10 units




3) Perimeter = 18 units




4) Perimeter = 14 units




Perimeter = 6 units



7) Perimeter = 8 units



Perimeter = 22 units



PREVIEW

Gain complete access to the largest collection of worksheets in all subjects!


Members, please log in to download this worksheet.

Not a member? Please sign up to gain complete access.


www.mathworksheets4kids.com

Draw three different shapes with the perimeter 14 units.

10)



11)



12)

