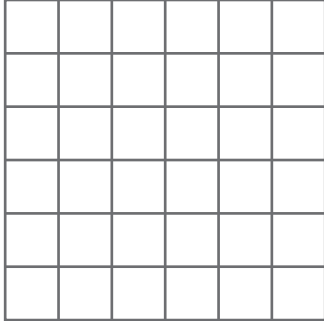



Draw any shape in each grid with the following perimeter.

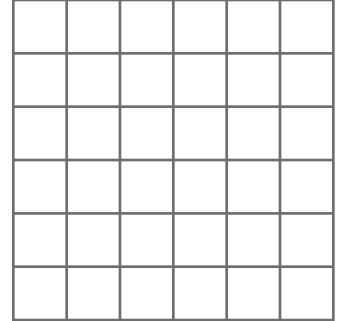
1) Perimeter = 4 units



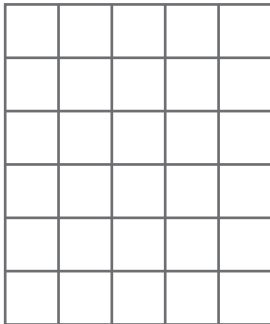
2) Perimeter = 20 units




3) Perimeter = 16 units




4) Perimeter = 22 units




Perimeter = 12 units



7) Perimeter = 10 units



Perimeter = 8 units



**PREVIEW**

Gain complete access to the largest collection of worksheets in all subjects!


Members, please log in to download this worksheet.

Not a member? Please sign up to gain complete access.


[www.mathworksheets4kids.com](http://www.mathworksheets4kids.com)

Draw three different shapes with the perimeter 12 units.

10)



11)



12)

