






Name : \_\_\_\_\_

## Bar Graph - School Transportation

Sheet 2

A survey is conducted among a group of students about how they get to school, and the data is recorded. Use the data to create a bar graph. Write a title, label the two axes, make an appropriate scale, and draw the graph.

By Car	By Train	On Foot	By Bicycle	By Bus
				
80				100

# PREVIEW

Gain complete access to the largest collection of worksheets in all subjects!

Members, please log in to download this worksheet.

Not a member? Please sign up to gain complete access.

[www.mathworksheets4kids.com](http://www.mathworksheets4kids.com)