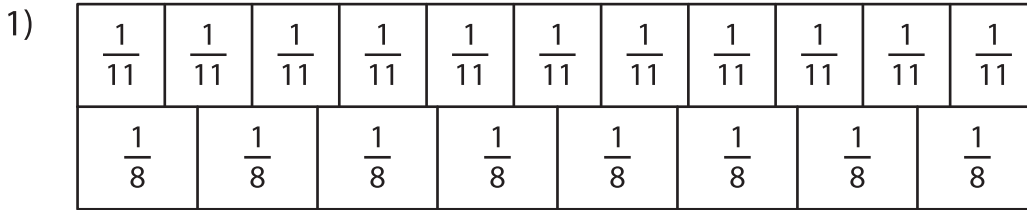
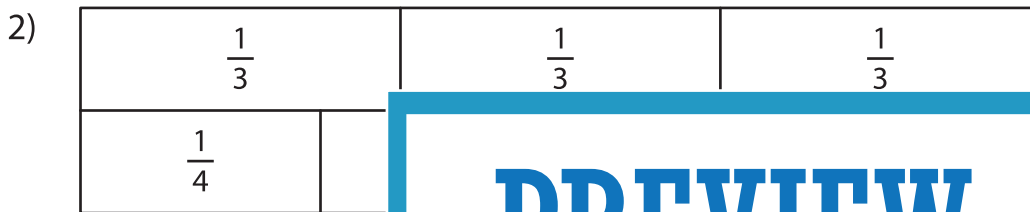


Comparing Fractions - Bar Model

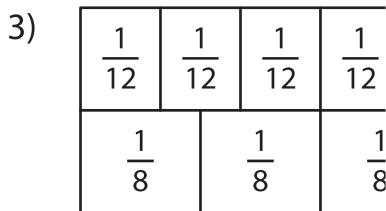
Shade each strip to represent the specified fraction. Compare the fractions using the symbols: $>$, $<$, and $=$.



$$\frac{9}{11} \quad \bigcirc \quad \frac{7}{8}$$

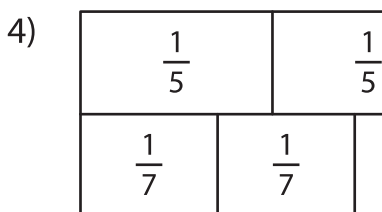


$$\frac{2}{3} \quad \bigcirc \quad \frac{1}{4}$$



Gain complete access to the largest
collection of worksheets in all subjects!

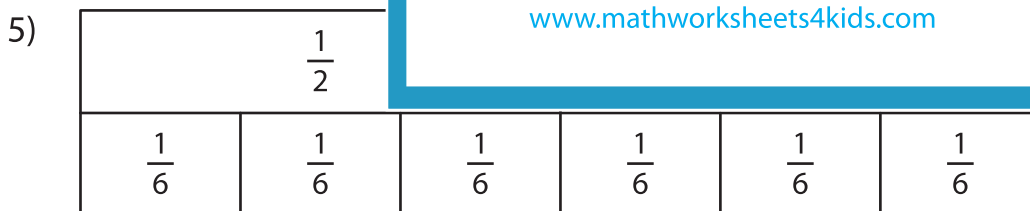
$$\frac{3}{12} \quad \bigcirc \quad \frac{2}{8}$$



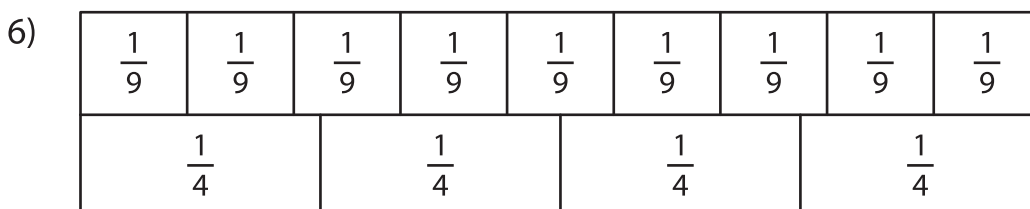
Members, please
log in to
download this
worksheet.

Not a member?
Please sign up to
gain complete
access.

$$\frac{4}{5} \quad \bigcirc \quad \frac{4}{7}$$



$$\frac{1}{2} \quad \bigcirc \quad \frac{3}{6}$$



$$\frac{6}{9} \quad \bigcirc \quad \frac{3}{4}$$