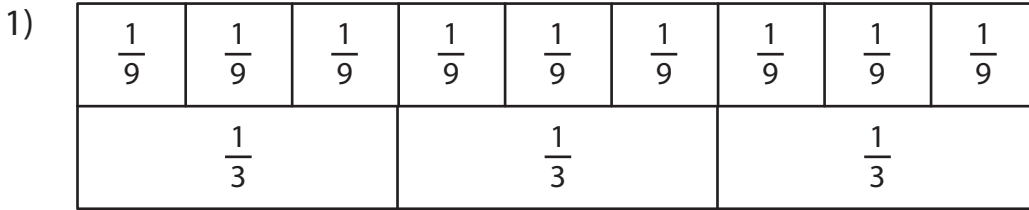
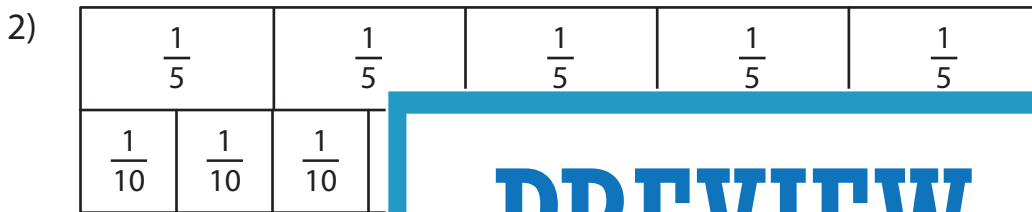


Comparing Fractions - Bar Model

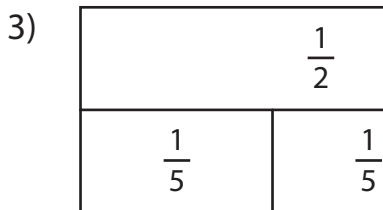
Shade each strip to represent the specified fraction. Compare the fractions using the symbols: $>$, $<$, and $=$.



$\frac{6}{9}$ $\frac{2}{3}$

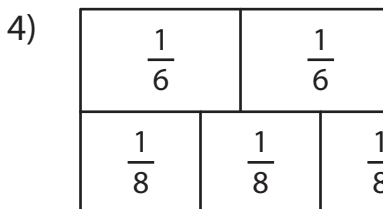


$\frac{1}{5}$ $\frac{6}{10}$



Gain complete access to the largest collection of worksheets in all subjects!

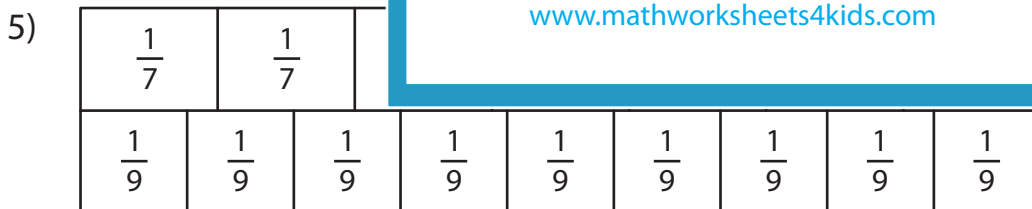
$\frac{1}{2}$ $\frac{2}{5}$



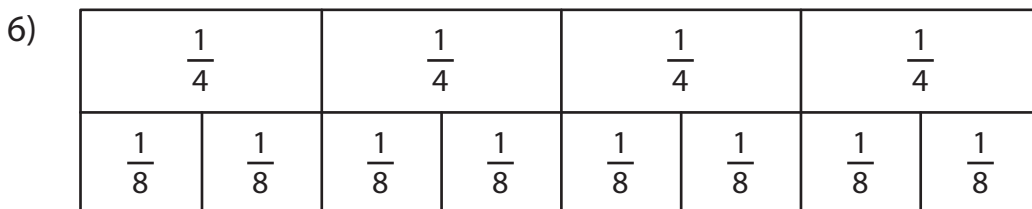
Members, please log in to download this worksheet.

Not a member? Please sign up to gain complete access.

$\frac{5}{6}$ $\frac{7}{8}$



$\frac{2}{7}$ $\frac{2}{9}$



$\frac{3}{4}$ $\frac{6}{8}$

PREVIEW

Gain complete access to the largest collection of worksheets in all subjects!

Members, please log in to download this worksheet.

Not a member? Please sign up to gain complete access.

www.mathworksheets4kids.com