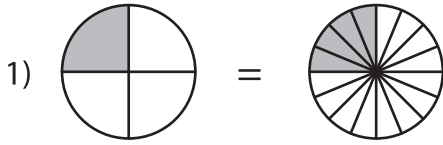


Name : \_\_\_\_\_

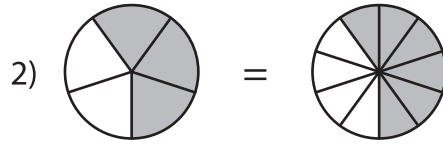
## Equivalent Fractions

Proper Fractions: S4

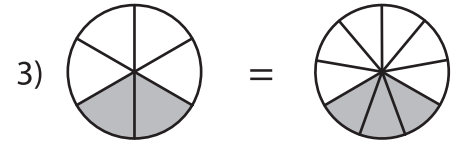
Observe each pair of pie models and write the equivalent fraction sentence.



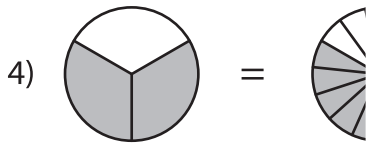
$$\frac{1}{4} = \frac{4}{16}$$



$$\frac{\square}{\square} = \frac{\square}{\square}$$



$$\frac{\square}{\square} = \frac{\square}{\square}$$



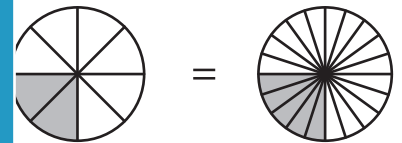
$$\frac{\square}{\square} = \frac{\square}{\square}$$

**PREVIEW**  
Gain complete access to the largest collection of worksheets in all subjects!

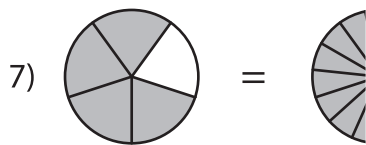
Members, please log in to download this worksheet.

Not a member? Please sign up to gain complete access.

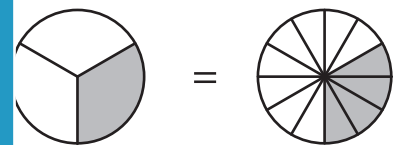
[www.mathworksheets4kids.com](http://www.mathworksheets4kids.com)



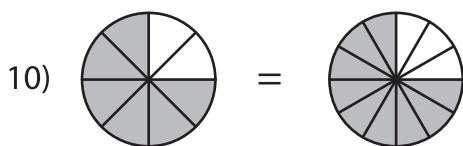
$$\frac{\square}{\square} = \frac{\square}{\square}$$



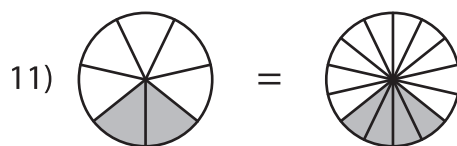
$$\frac{\square}{\square} = \frac{\square}{\square}$$



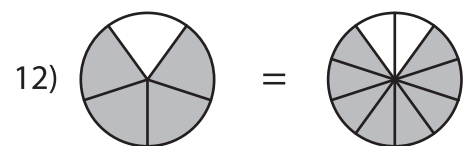
$$\frac{\square}{\square} = \frac{\square}{\square}$$



$$\frac{\square}{\square} = \frac{\square}{\square}$$



$$\frac{\square}{\square} = \frac{\square}{\square}$$



$$\frac{\square}{\square} = \frac{\square}{\square}$$