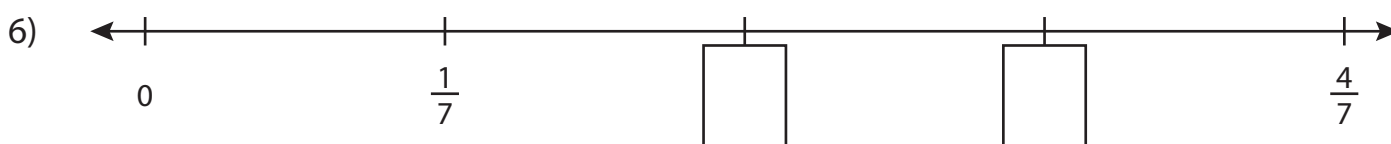
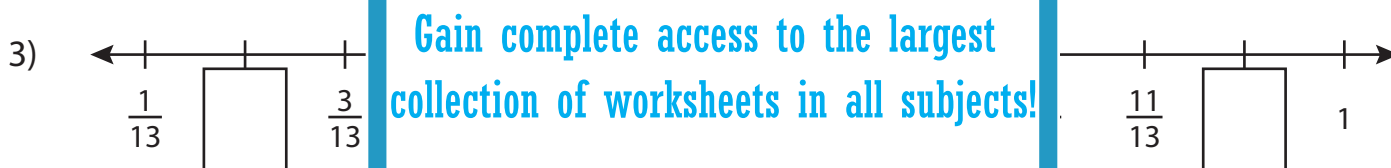
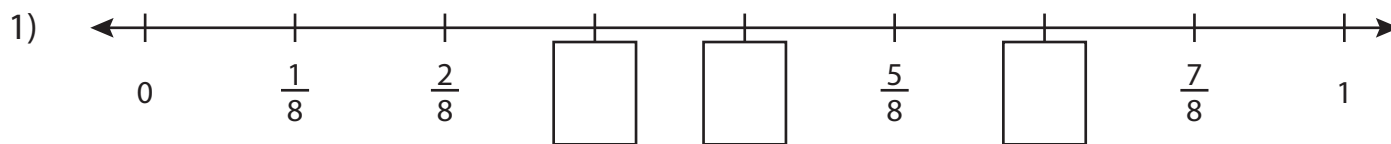


Name : _____

Missing Fractions

Proper Fractions: T1S5

Write the missing fractions in each number line.



PREVIEW

Gain complete access to the largest collection of worksheets in all subjects!

Members, please log in to download this worksheet.

Not a member? Please sign up to gain complete access.

www.mathworksheets4kids.com

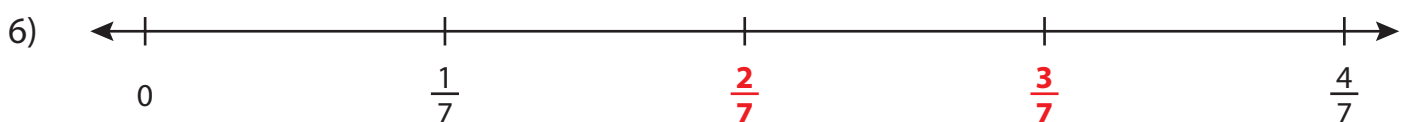
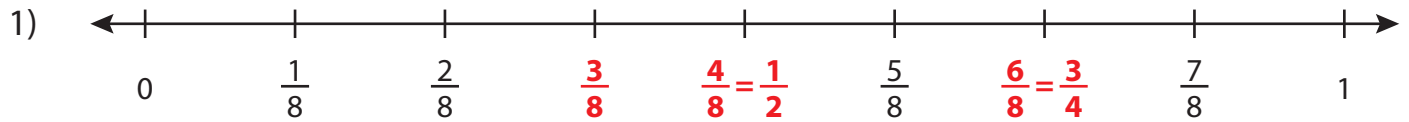
Name : _____

Answer key

Missing Fractions

Proper Fractions: T1S5

Write the missing fractions in each number line.



Gain complete access to the largest
collection of worksheets in all subjects!

Members, please
log in to
download this
worksheet.

Not a member?
Please sign up to
gain complete
access.

www.mathworksheets4kids.com