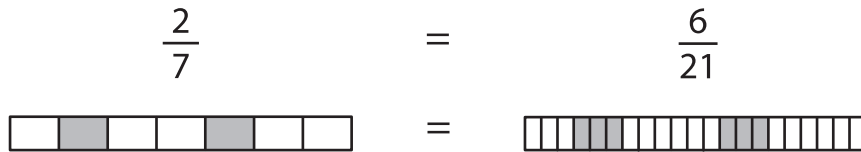


Name : _____

Equivalent Fractions

Proper Fractions: S2

Example:



Shade the fraction bars for the given equivalent fractions.

1) $\frac{1}{2} = \frac{9}{18}$



2) $\frac{12}{20}$



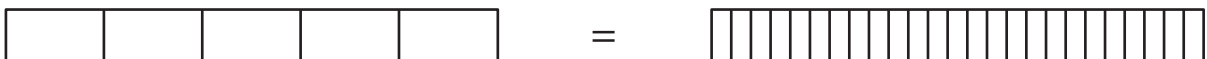
3) $\frac{16}{18}$



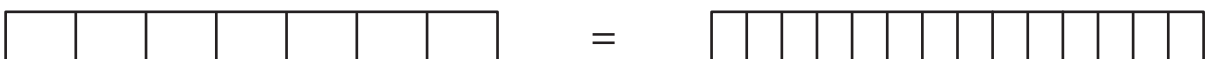
4) $\frac{4}{20}$



5) $\frac{2}{5} = \frac{10}{25}$



6) $\frac{4}{7} = \frac{8}{14}$



PREVIEW

Gain complete access to the largest collection of worksheets in all subjects!

Members, please log in to download this worksheet.

Not a member? Please sign up to gain complete access.

www.mathworksheets4kids.com