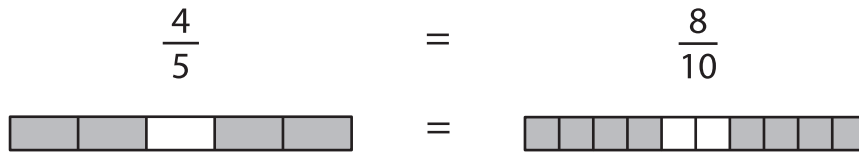


Name : _____

Equivalent Fractions

Proper Fractions: S3

Example:



Shade the fraction bars for the given equivalent fractions.

1) $\frac{5}{7} = \frac{15}{21}$



2) $\frac{6}{24}$



3) $\frac{8}{18}$





4) $\frac{2}{16}$



5) $\frac{3}{7} = \frac{12}{28}$



6) $\frac{2}{3} = \frac{6}{9}$



PREVIEW

Gain complete access to the largest collection of worksheets in all subjects!

Members, please log in to download this worksheet.

Not a member? Please sign up to gain complete access.

www.mathworksheets4kids.com