

Capacity Estimation

Customary Units: S1

Estimate the capacity of each object.

1)



- 1 cup
- 3 pints
- 1 gallon

2)




- 1 gallon
- Half a cup
- 1 pint

3)



- 2 pints
- 2 gallons
- 1 quarts

4)



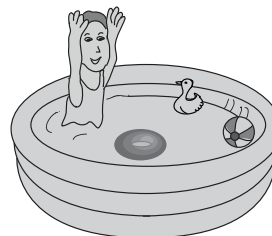
- 2 quarts
- 5 pints
- 1 pint

5)



- 5 quarts
- 1 pint
- 9 gallons

6)



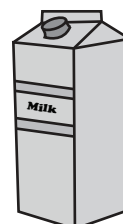
- 10 cups
- 25 gallons
- 5 quarts

7)



- 3 cups
- 3 quarts
- 9 gallons

8)



- 3 pints
- 3 gallons
- 2 cups

Answer key**Capacity Estimation**

Customary Units: S1

Estimate the capacity of each object.

1)



- **1 cup**
- 3 pints
- 1 gallon

2)




- 1 gallon
- Half a cup
- **1 pint**

3)



- 2 pints
- **2 gallons**
- 1 quarts

4)




- 2 quarts
- 5 pints
- **1 pint**

5)



- **5 quarts**
- 1 pint
- 9 gallons

6)



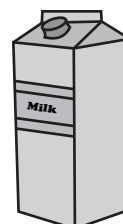
- 10 cups
- **25 gallons**
- 5 quarts

7)



- 3 cups
- **3 quarts**
- 9 gallons

8)



- **3 pints**
- 3 gallons
- 2 cups