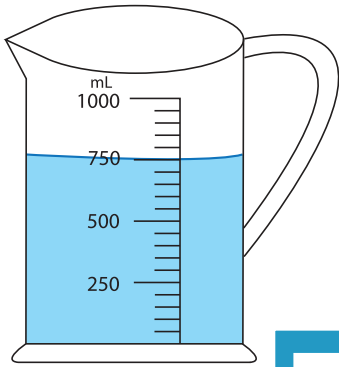


Measuring Jug

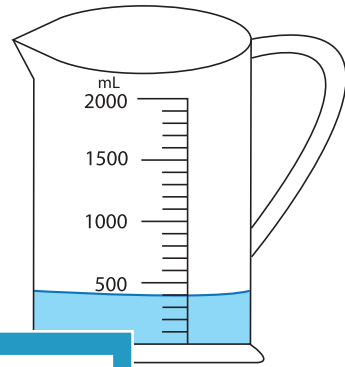
1) If you add 200 mL of water in each jug, what would be the new reading?

a)



_____ mL

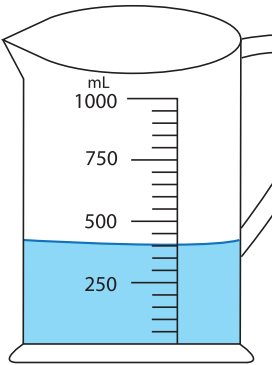
b)



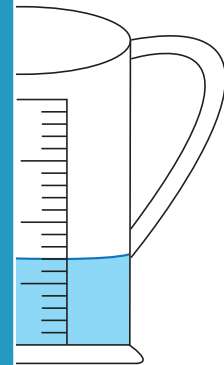
_____ mL

2) How much water require

a)



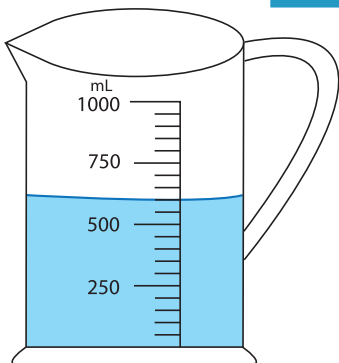
_____ mL



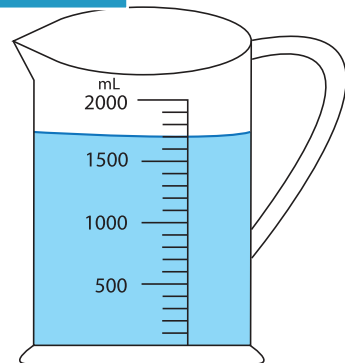
_____ mL

3) How much water should

a)



_____ mL



_____ mL

level to 300 mL?

PREVIEW

Gain complete access to the largest collection of worksheets in all subjects!

Members, please log in to download this worksheet.

Not a member? Please sign up to gain complete access.

www.mathworksheets4kids.com