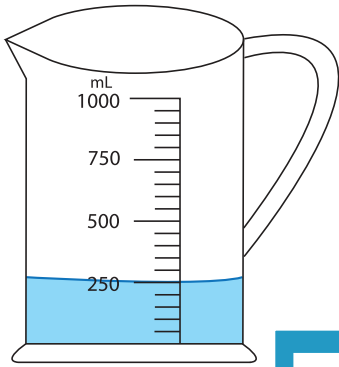


Measuring Jug

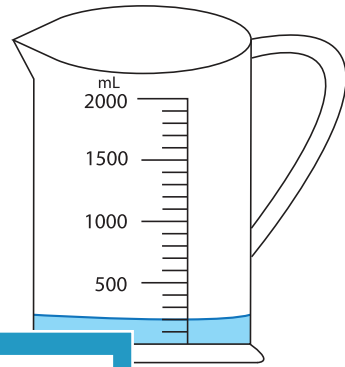
1) How much water required to fill each jug up to 950 mL?

a)



_____ mL

b)

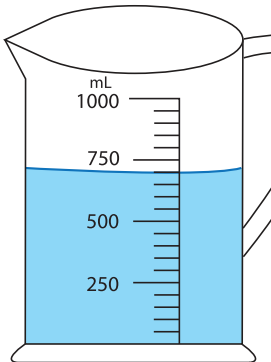


_____ mL

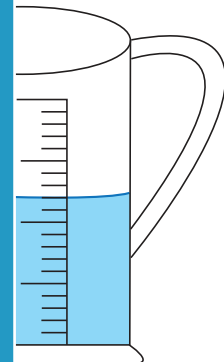
2) How much water should

level to 600 mL?

a)



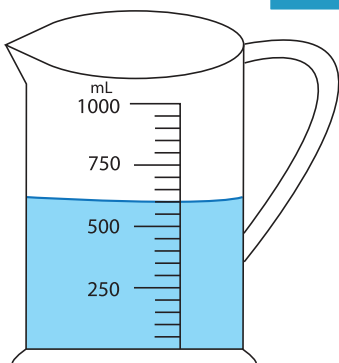
_____ mL



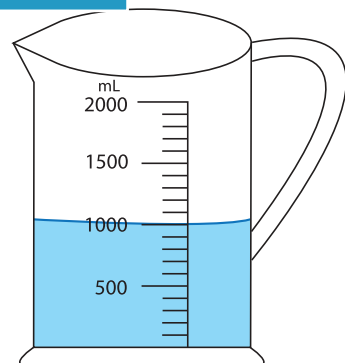
_____ mL

3) If you add 350 mL of water

a)



_____ mL



_____ mL

PREVIEW

Gain complete access to the largest collection of worksheets in all subjects!

Members, please log in to download this worksheet.

Not a member? Please sign up to gain complete access.

www.mathworksheets4kids.com