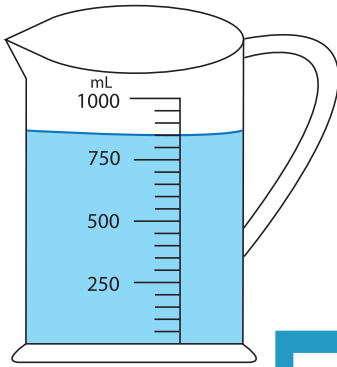


## Measuring Jug

Sheet 3

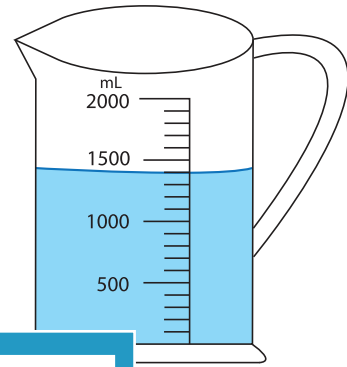
1) How much water should you pour out from each jug to drop down the water level to 500 mL?

a)



\_\_\_\_\_ mL

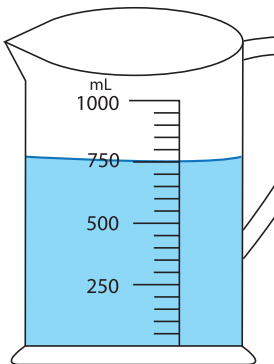
b)



\_\_\_\_\_ mL

2) If you add 150 mL of water

a)



\_\_\_\_\_ mL

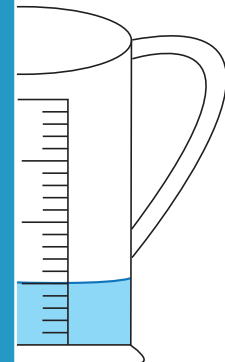
**PREVIEW**

Gain complete access to the largest collection of worksheets in all subjects!

Members, please log in to download this worksheet.

Not a member? Please sign up to gain complete access.

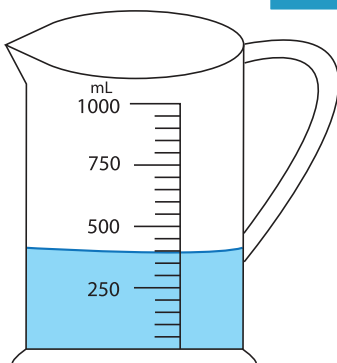
[www.mathworksheets4kids.com](http://www.mathworksheets4kids.com)



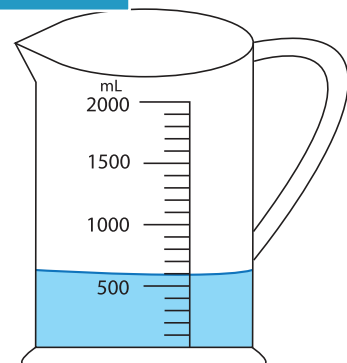
\_\_\_\_\_ mL

3) How much water require

a)



\_\_\_\_\_ mL



\_\_\_\_\_ mL