




**Weight Estimation - Metric Units**

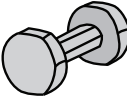


Sheet 1

Choose the object close to the given weight.



1) 3 kilograms

- 
- 
- 




2) 150 grams

- 
- 
- 

3) 100 grams

- 
- 
- 

5) 1.5 kilograms

- 
- 
- 

# PREVIEW




Gain complete access to the largest  
collection of worksheets in all subjects!

Members, please  
log in to  
download this  
worksheet.



Not a member?  
Please sign up to  
gain complete  
access.

[www.mathworksheets4kids.com](http://www.mathworksheets4kids.com)

7) 5 grams

- 
- 
- 

8) 2 kilograms

- 
- 
- 