


Estimating Linear Measurement

Sheet 1


Choose the correct answer that best estimates length, height or depth of each object.

1) Height of building



- 5 feet
- 12 yards
- 15 inches

2) Length of key



- 2 yards
- 7 feet
- 4 inches

3) Height of camel



- 7 feet
- 9 inches

PREVIEW

Gain complete access to the largest collection of worksheets in all subjects!


Members, please log in to download this worksheet.

Not a member? Please sign up to gain complete access.

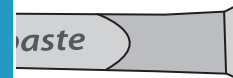
www.mathworksheets4kids.com

- 10 yards

5) Length of wrench




- 7 inches
- 15 feet



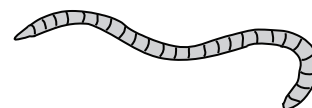
- 10 yards

7) Height of tree



- 8 yards
- 1 foot
- 7 inches

8) Length of earthworm



- 10 feet
- 5 inches
- 2 yards