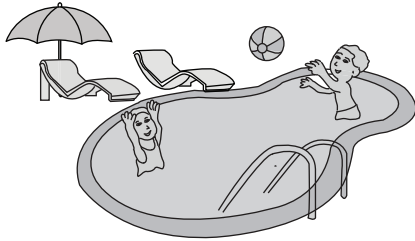


## Estimating Linear Measurement

Sheet 2

Choose the correct answer that best estimates length, height or depth of each object.

1) Depth of kids pool



- 2 feet
- 10 yards
- 5 inches

2) Length of comb



- 2 yards
- 8 inches
- 3 feet

3) Height of man



- 6 feet
- 13 inches


# PREVIEW

Gain complete access to the largest  
collection of worksheets in all subjects!

Members, please  
log in to  
download this  
worksheet.

Not a member?  
Please sign up to  
gain complete  
access.

[www.mathworksheets4kids.com](http://www.mathworksheets4kids.com)

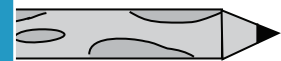


- 10 inches
- 30 feet

5) Length of nail



- 5 feet
- 2 inches




- 2 yards
- 3 inches

7) Height of house



- 9 yards
- 1 foot
- 7 inches

8) Height of giraffe



- 17 feet
- 15 inches
- 1 yard