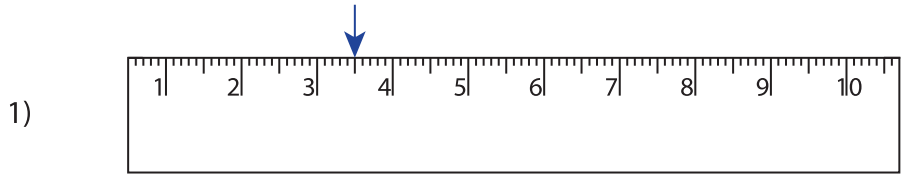
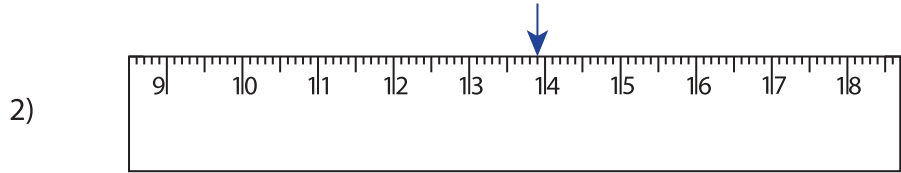


**Reading & Marking Ruler - Decimals**

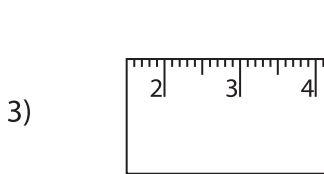
Write the reading shown by the pointer in each problem.



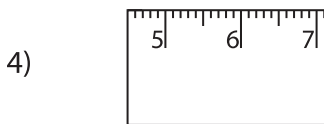
\_\_\_\_\_ cm



\_\_\_\_\_ cm



\_\_\_\_\_ cm



\_\_\_\_\_ cm

**PREVIEW**

Gain complete access to the largest collection of worksheets in all subjects!

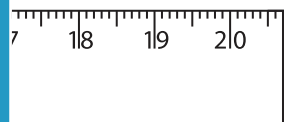
Members, please log in to download this worksheet.

Not a member? Please sign up to gain complete access.

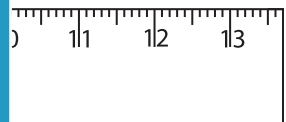
[www.mathworksheets4kids.com](http://www.mathworksheets4kids.com)

Draw the pointer to show

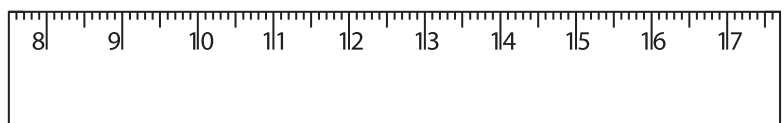
5) 13.8 cm



6) 8.3 cm



7) 15.7 cm



8) 12.1 cm

