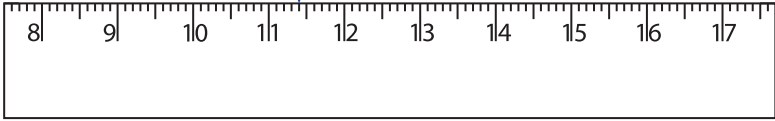
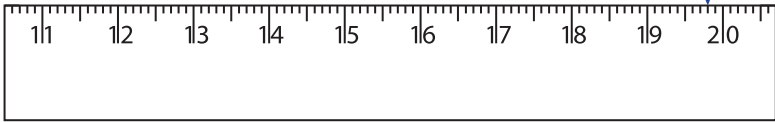


Reading & Marking Ruler - Decimals

Write the reading shown by the pointer in each problem.

1)  _____ cm

2)  _____ cm

3)  _____ cm

4)  _____ cm

PREVIEW

Gain complete access to the largest collection of worksheets in all subjects!

Members, please log in to download this worksheet.

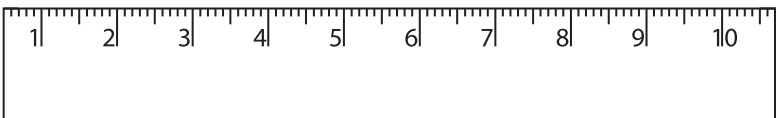
Not a member? Please sign up to gain complete access.

www.mathworksheets4kids.com

Draw the pointer to show

5) 15.9 cm 

6) 8.2 cm 

7) 4.6 cm 

8) 7.3 cm 