


**Measuring Weight - Metric Units**

ES2


Measure the weight of each object.

1)




\_\_\_\_\_

2)




\_\_\_\_\_ kg

3)



\_\_\_\_\_ kg

4)



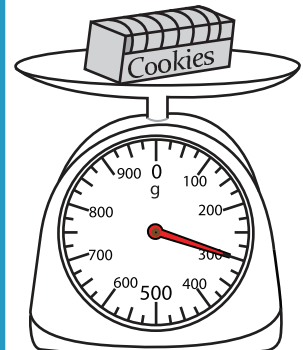
\_\_\_\_\_

**PREVIEW**  
Gain complete access to the largest collection of worksheets in all subjects!

Members, please log in to download this worksheet.

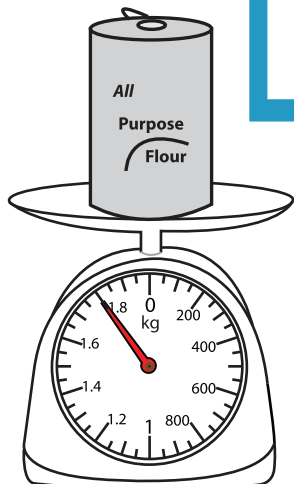
Not a member? Please sign up to gain complete access.

[www.mathworksheets4kids.com](http://www.mathworksheets4kids.com)




\_\_\_\_\_ g

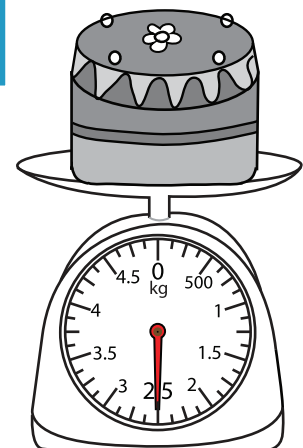
7)



\_\_\_\_\_ kg



\_\_\_\_\_ kg



\_\_\_\_\_ kg