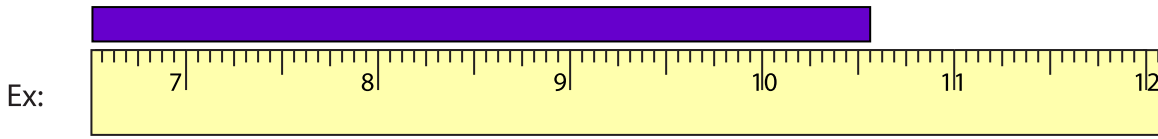


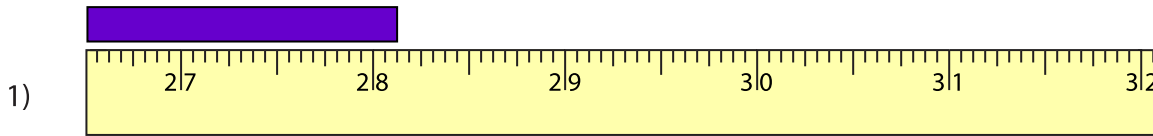
Reading Tapes

One-sixteenth: S1

Measure the length of each bar.



10 ⁹/₁₆ in



_____ in



_____ in



_____ in



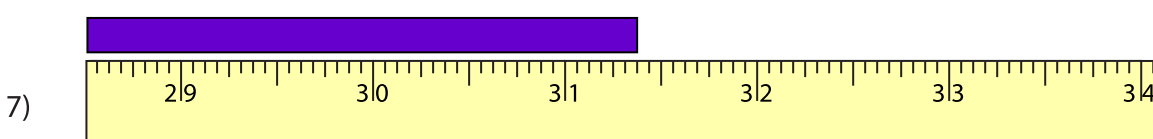
_____ in



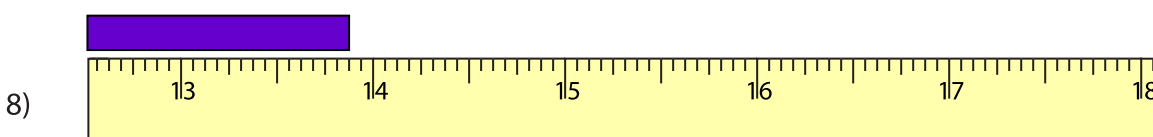
_____ in



_____ in



_____ in



_____ in

PREVIEW

Gain complete access to the largest collection of worksheets in all subjects!

Members, please log in to download this worksheet.

Not a member? Please sign up to gain complete access.

www.mathworksheets4kids.com