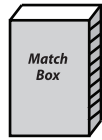


Weight Estimation

Metric Units: S2


Estimate the weight of each object.

1)



- 4 g
- 400 g
- 40 g

2)



- 2 kg
- 200 g
- 20 g

3)



- 2 kg
- 20 g

PREVIEW

Gain complete access to the largest
collection of worksheets in all subjects!

Members, please
log in to
download this
worksheet.

Not a member?
Please sign up to
gain complete
access.

www.mathworksheets4kids.com



- 50 kg

5)

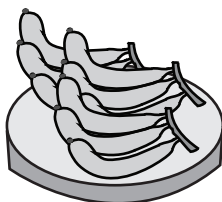


- 3 kg
- 30 g



- 50 g

7)



- 25 g
- 250 g
- 2.5 kg

8)



- 20 g
- 2 g
- 200 g