

Weight Estimation

Metric Units: S3


Estimate the weight of each object.

1)



- 1 kg
- 100 g
- 10 g

2)



- 7 kg
- 7 g
- 70 g

3)

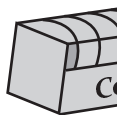


- 6 g
- 60 g



- 8 kg

5)



- 200 g
- 2 kg



- 40 g

PREVIEW

Gain complete access to the largest collection of worksheets in all subjects!

Members, please log in to download this worksheet.

Not a member? Please sign up to gain complete access.


www.mathworksheets4kids.com

7)



- 2 g
- 20 g
- 2 kg

8)



- 50 g
- 5 g
- 500 g