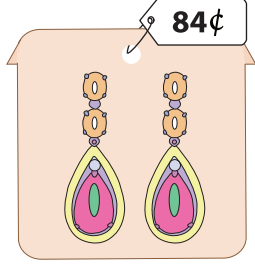
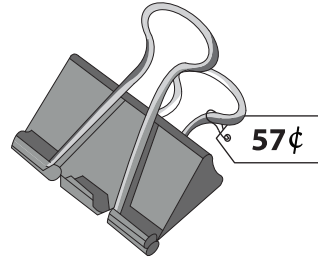



What is Your Change?


You pay \$1 for each item. Show the change you receive, with minimum number of coins.

1)  _____ quarters
 _____ dimes
 _____ nickels
 _____ pennies

2)  _____ quarters
 _____ dimes
 _____ nickels
 _____ pennies

3) 

_____ quarters
 _____ dimes
 _____ nickels
 _____ pennies

5) 

_____ quarters
 _____ dimes
 _____ nickels
 _____ pennies

PREVIEW

Gain complete access to the largest collection of worksheets in all subjects!

Members, please log in to download this worksheet.

Not a member? Please sign up to gain complete access.

www.mathworksheets4kids.com

7) You pay with \$1 for a pendant that costs 39¢. Write your change in minimum number of coins.

_____ quarters ; _____ dimes ; _____ pennies

8) You pay with \$1 for a blankbook that costs 91¢. Write your change in minimum number of coins.

_____ quarters ; _____ nickels ; _____ pennies