

Name: \_\_\_\_\_

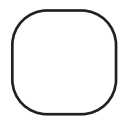

# Who has More?

How much money does each child have in her/his pouch? Use < or > symbols to figure out who has more?


1) Olivia has \$ \_\_\_\_\_




Sandra has \$ \_\_\_\_\_




2) Charlotte has \$ \_\_\_\_\_




\_\_\_\_\_ has \$ \_\_\_\_\_




3) Henry has \$ \_\_\_\_\_



\_\_\_\_\_ has \$ \_\_\_\_\_




4) Ellie has \$ \_\_\_\_\_




\_\_\_\_\_ has \$ \_\_\_\_\_



5) Amelia has \$ \_\_\_\_\_



Emma has \$ \_\_\_\_\_



**PREVIEW**

Gain complete access to the largest collection of worksheets in all subjects!

Members, please log in to download this worksheet.

Not a member? Please sign up to gain complete access.

[www.mathworksheets4kids.com](http://www.mathworksheets4kids.com)