







Name : \_\_\_\_\_

# Counting Coins & Bills

Up to \$10: S2

Count the money and write the total amount.

1) 	<hr/>
2) 	<hr/>
3) 	<hr/>
4) 	<hr/>
5) 	<hr/>
6) 	<hr/>

**PREVIEW**

Gain complete access to the largest collection of worksheets in all subjects!

Members, please log in to download this worksheet.

Not a member? Please sign up to gain complete access.

[www.mathworksheets4kids.com](http://www.mathworksheets4kids.com)