

Name : \_\_\_\_\_

# Money Conversion

A) Convert cents to dollars.

1)  $583\text{¢}$  = \_\_\_\_\_

2)  $64\text{¢}$  = \_\_\_\_\_

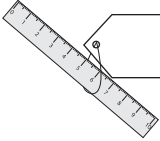
3)  $447\text{¢}$  = \_\_\_\_\_

4)  $210\text{¢}$  = \_\_\_\_\_

5)  $89\text{¢}$  = \_\_\_\_\_

6)  $5\text{¢}$  = \_\_\_\_\_

7)   $900\text{¢}$  = \_\_\_\_\_

\_\_\_\_\_ 

9) Cole bought a pack of \_\_\_\_\_  
the pack?  
\_\_\_\_\_

\_\_\_\_\_ dollars did he pay to buy

**PREVIEW**

Gain complete access to the largest collection of worksheets in all subjects!

Members, please log in to download this worksheet.

Not a member? Please sign up to gain complete access.

[www.mathworksheets4kids.com](http://www.mathworksheets4kids.com)

B) Convert dollars to cents

1)  $\$6.06$  = \_\_\_\_\_



\_\_\_\_\_



3)  $\$0.35$  = \_\_\_\_\_

\_\_\_\_\_

5)  $\$8.68$  = \_\_\_\_\_

\_\_\_\_\_

7)   $\$0.63$  =  \_\_\_\_\_

8)   $\$9.59$  =  \_\_\_\_\_

9) Emma has  $\$4.25$  in her piggy bank. How many cents does Emma have in her piggy bank?  
\_\_\_\_\_