



**Let's Go Shopping!**

**FOOD STORE**

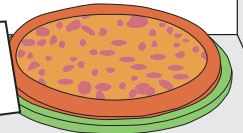
**\$11.50**




**\$3.63**




**\$15.00**



**\$4.79**



**\$63.92**



**PREVIEW**

Gain complete access to the largest collection of worksheets in all subjects!

Members, please log in to download this worksheet.

Not a member? Please sign up to gain complete access.

[www.mathworksheets4kids.com](http://www.mathworksheets4kids.com)

**\$5.00**

\_\_\_\_\_

\_\_\_\_\_

**\$70.00**

\_\_\_\_\_

\_\_\_\_\_

**\$20.00**

\_\_\_\_\_

\_\_\_\_\_

**\$50.00**

\_\_\_\_\_

\_\_\_\_\_

**\$15.00**

\_\_\_\_\_

\_\_\_\_\_

1) John buys a sandwich.  
What is the price of the sandwich?  
How much change did he receive?

2) Robert buys a cake. He pays the cashier \$70.00.  
What is the price of the cake?  
How much change did he receive?

3) Susan buys a pizza. She pays the cashier \$20.00.  
What is the price of the pizza?  
How much change did she receive?

4) William buys a tub of popcorn. He pays the cashier \$50.00.  
What is the price of the popcorn?  
How much change did he receive?

5) Maria buys a loaf of bread. She pays the cashier \$15.00.  
What is the price of the bread?  
How much change did she receive?