

Let's Go Shopping!

HOME APPLIANCES STORE


\$75.45



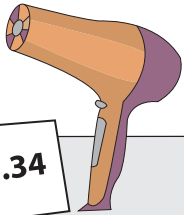
\$55.95



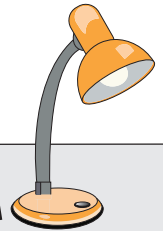
\$11.29



\$20.34



\$43.57



PREVIEW

Gain complete access to the largest collection of worksheets in all subjects!

Members, please log in to download this worksheet.

Not a member? Please sign up to gain complete access.

www.mathworksheets4kids.com

- 1) Mark buys an iron box for \$70.00.
 What is the price of the iron box?
 How much change did he receive?

\$70.00

- 2) Rose buys a fry pan. She pays the cashier \$60.00.
 What is the price of the fry pan?
 How much change did she receive?

\$15.00

- 3) Jessica buys a mixer for \$100.00.
 What is the price of the mixer?
 How much change did she receive?

\$100.00

- 4) Thomas buys a study lamp. He pays the cashier \$45.00.
 What is the price of the study lamp?
 How much change did he receive?

\$45.00

- 5) Amy buys a toaster. She pays the cashier \$50.00.
 What is the price of the toaster?
 How much change did she receive?

\$50.00