

Name : _____

Division Sentence - Arrays

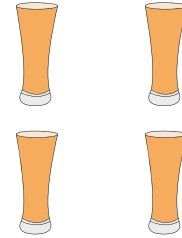
Sheet 1

Write a division sentence to describe each array.


1)



2)




3)



PREVIEW

Gain complete access to the largest collection of worksheets in all subjects!



5)



Members, please log in to download this worksheet.

Not a member? Please sign up to gain complete access.



www.mathworksheets4kids.com

7)



8)

