



# Division Sentence - Arrays

Write a division sentence to describe each array.


1)



2)



3)



**PREVIEW**


Gain complete access to the largest collection of worksheets in all subjects!

Members, please log in to download this worksheet.

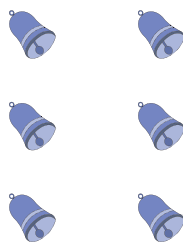
Not a member? Please sign up to gain complete access.

[www.mathworksheets4kids.com](http://www.mathworksheets4kids.com)

5)



7)



8)

