




# Division Models

A)



1) How many eggs are there in all?

\_\_\_\_\_ eggs

2) How many eggs are there in each nest?

\_\_\_\_\_ eggs



3) How many nests

\_\_\_\_\_ nests

4) Write a division sentence

\_\_\_\_\_ ÷ \_\_\_\_\_ = \_\_\_\_\_

B)



1) How many flowers

\_\_\_\_\_ flowers

2) How many flowers are there in each flower pot?

\_\_\_\_\_ flowers

3) How many flower pots are there?

\_\_\_\_\_ flower pots

4) Write a division sentence to describe the model.

\_\_\_\_\_ ÷ \_\_\_\_\_ = \_\_\_\_\_

## PREVIEW

Gain complete access to the largest collection of worksheets in all subjects!

Members, please log in to download this worksheet.

Not a member? Please sign up to gain complete access.

[www.mathworksheets4kids.com](http://www.mathworksheets4kids.com)