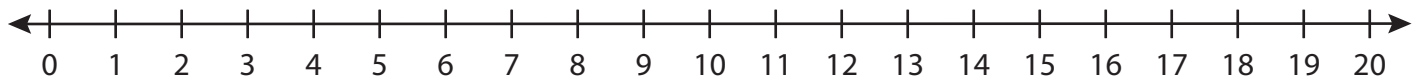


**Number Line Division**

T1S1

Indicate hops on each number line and complete the division sentences.

1)  $20 \div 5 =$  \_\_\_\_\_



2)  $18 \div 9 =$  \_\_\_\_\_



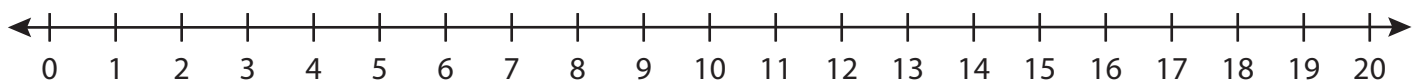
3)  $12 \div 4 =$  \_\_\_\_\_



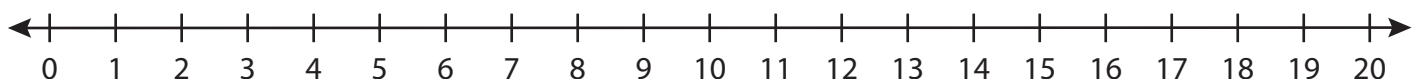
4)  $16 \div 2 =$  \_\_\_\_\_



5)  $15 \div 3 =$  \_\_\_\_\_



6)  $9 \div 1 =$  \_\_\_\_\_

**PREVIEW**Gain complete access to the largest  
collection of worksheets in all subjects!Members, please  
log in to  
download this  
worksheet.Not a member?  
Please sign up to  
gain complete  
access.[www.mathworksheets4kids.com](http://www.mathworksheets4kids.com)