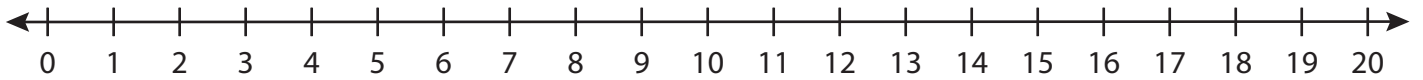


Number Line Division

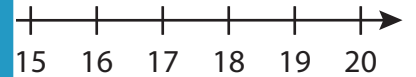
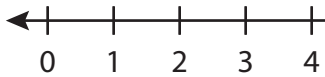
T1S4

Indicate hops on each number line and complete the division sentences.

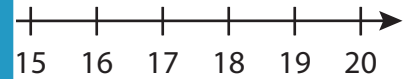
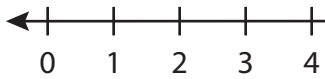
1) $18 \div 2 =$ _____



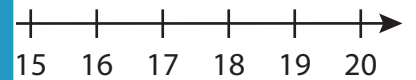
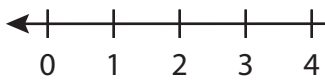
2) $3 \div 3 =$ _____



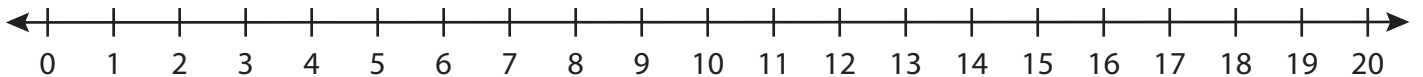
3) $14 \div 7 =$ _____



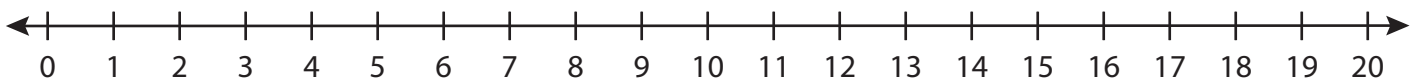
4) $5 \div 5 =$ _____



5) $8 \div 4 =$ _____



6) $6 \div 1 =$ _____



PREVIEW

Gain complete access to the largest
collection of worksheets in all subjects!

Members, please
log in to
download this
worksheet.

Not a member?
Please sign up to
gain complete
access.

www.mathworksheets4kids.com