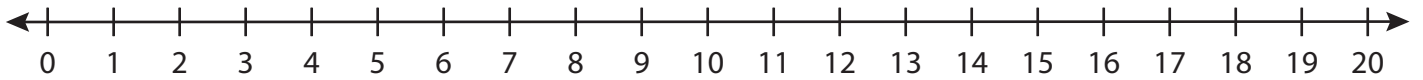


Number Line Division

T1S5

Indicate hops on each number line and complete the division sentences.

1) $12 \div 2 =$ _____



2) $20 \div 10 =$ _____



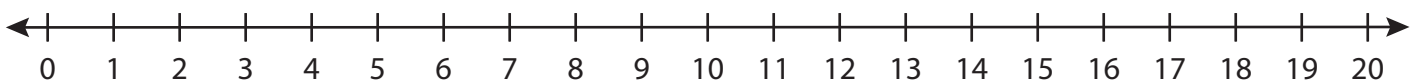
3) $18 \div 3 =$ _____



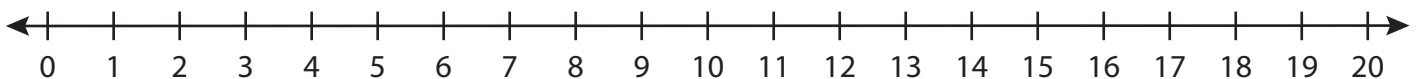
4) $8 \div 1 =$ _____



5) $10 \div 5 =$ _____



6) $6 \div 6 =$ _____



PREVIEW

Gain complete access to the largest
collection of worksheets in all subjects!

Members, please
log in to
download this
worksheet.

Not a member?
Please sign up to
gain complete
access.

www.mathworksheets4kids.com