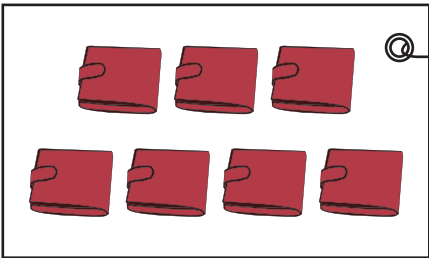
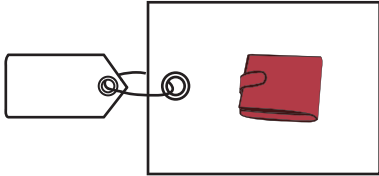


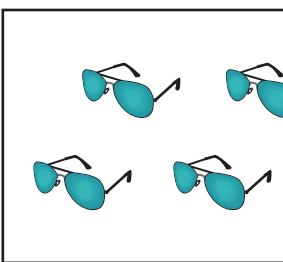
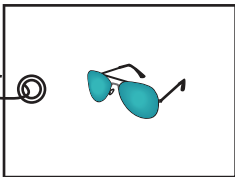
Name : _____

Division - Unit Price



Find the price of each individual item in the package.

1)  $63 \div \underline{\quad} =$ 

2)  

3)  

4)  

5)  $12 \div \underline{\quad} =$ 

6) A pack of shampoo bottles costs \$10. There are 2 shampoo bottles in the pack. How much does each shampoo bottle cost?

PREVIEW

Gain complete access to the largest collection of worksheets in all subjects!

Members, please log in to download this worksheet.

Not a member? Please sign up to gain complete access.

www.mathworksheets4kids.com