

Name : _____

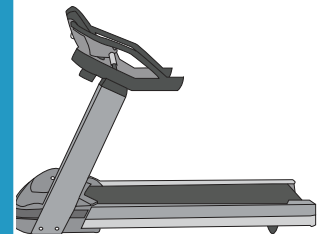
Division

without remainder: S1

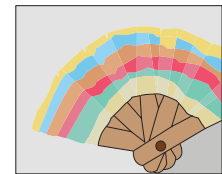
- 1) Julia's wardrobe has a total of 36 pieces of clothing. If they are arranged equally in three shelves, how many pieces of clothing will be found in each shelf?




- 2) A unisex gym has a total stock of 55 treadmills. If they are arranged in 5 rows, how many treadmills



- 3) Kathleen uses 48 Popsicle sticks divided equally among her 6 cousins. How many



- 4) Miranda baked 24 cakes and arranged them on 6 plates, how many



- 5) Delbert invests a total of \$54 in the shares of XYZ company. If he has bought 6 shares from the company, how much is each share worth?



PREVIEW

Gain complete access to the largest collection of worksheets in all subjects!

Members, please log in to download this worksheet.

Not a member? Please sign up to gain complete access.

www.mathworksheets4kids.com