

Name : _____

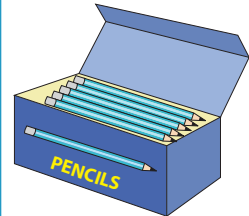
Division

Sheet 1

- 1) Olivia took along four friends to a local farm to pick apples. They picked 40 apples in all. How many apples will each one get, if they decided to share them equally?



- 2) Cheryl, a grade 1 teacher, distributes 36 pencils equally among nine children in her class. How many




- 3) Samantha baked _____ cupcakes. _____ of the cupcakes are shared equally among _____ children. How many

Gain complete access to the largest collection of worksheets in all subjects!

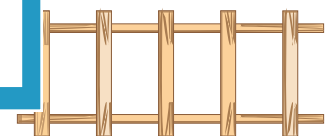
Members, please log in to download this worksheet.

Not a member? Please sign up to gain complete access.



- 4) Matt puts up a square wooden panel picket fence. _____ panels are used on each side of the fence. How many

www.mathworksheets4kids.com



- 5) Students of grade 4 were divided into seven teams for a game of dumb charades. If the class comprises 49 students, how many students can be found on each team?

