


Name : \_\_\_\_\_

## Division

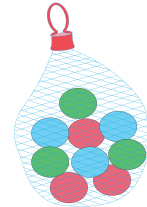
Sheet 2

- 1) Gretchen has a deadline of 5 days to complete a project. She estimates that she would require a total of 30 hours to complete the project. How many hours will she be required to work on a daily basis to complete the project on time?



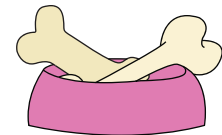
\_\_\_\_\_

- 2) Graham shares a pack of twenty-four marbles among five of his friends and himself. How many marbles did each friend receive?



\_\_\_\_\_

- 3) Rebecca, a dog lover, has 24 bones and splits them equally among five of her dogs. How many bones did each dog receive?



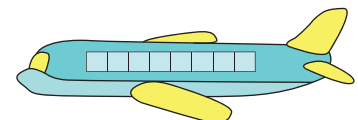
\_\_\_\_\_

- 4) Henry is employed for 40 hours a week. If he works for eight hours of a day, how many days does he work each week?



\_\_\_\_\_

- 5) The first class section of an airplane has a total seating capacity of 24 passengers. How many seats can be found in a row, if they are divided into 4 columns?



\_\_\_\_\_

# PREVIEW

Gain complete access to the largest collection of worksheets in all subjects!

Members, please log in to download this worksheet.

Not a member? Please sign up to gain complete access.

[www.mathworksheets4kids.com](http://www.mathworksheets4kids.com)