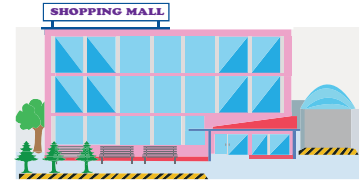


Name : _____

Division

Sheet 3


- 1) The TWX mall has a total of 40 shops equally spread over 4 levels. How many shops are located on each level?




- 2) Reese places an order for 48 half-litre water bottles. They arrive in a total of 6 cartons. How many bottles are in each carton?




- 3) A weekend theater performance has 5 groups for an audience of 100. If they are split into 5 groups, how many people are in each group?



- 4) Layla and eight friends went to the carousel at Central Park. If they paid \$27 in total, how much did each person pay?



- 5) A small hotel in New Jersey has a total of 28 slot machines. If they are arranged in 7 columns, how many slot machines can you find in each row?



PREVIEW

Gain complete access to the largest collection of worksheets in all subjects!

Members, please log in to download this worksheet.

Not a member? Please sign up to gain complete access.

www.mathworksheets4kids.com