


Multiplication Using Pictures

Sheet 2

1)




How many cherries will 9 such pastries contain?

2)



How many beads will 8 such bracelets have?

3)



How many arms will 7 such starfish have?


PREVIEW

Gain complete access to the largest collection of worksheets in all subjects!

Members, please log in to download this worksheet.

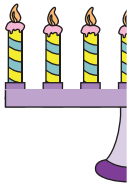
Not a member? Please sign up to gain complete access.

www.mathworksheets4kids.com



How many balls will 7 such bags contain?

5)

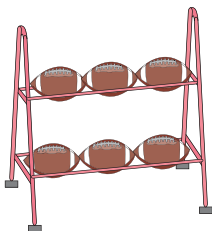


How many candles will 7 such candlesticks hold?



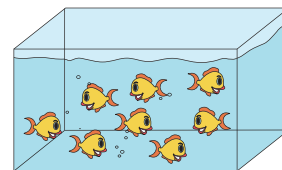
How many roses will 7 such vases hold?

7)



How many rugby balls will 3 such stands hold?

8)




How many fish will 4 such aquariums hold?

Multiplication Using Pictures

Sheet 2

1)



How many cherries will 9 such pastries contain?

$$\underline{2 \times 9 = 18}$$

2)



How many beads will 8 such bracelets have?

$$\underline{10 \times 8 = 80}$$

3)



How many arms will 5 such starfish have?

$$\underline{5 \times 6 = 30}$$


PREVIEW

Gain complete access to the largest collection of worksheets in all subjects!

Members, please log in to download this worksheet.

Not a member? Please sign up to gain complete access.

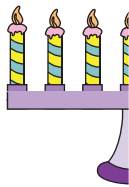
www.mathworksheets4kids.com



How many balloons will 7 such bags contain?

$$\underline{7 \times 9 = 63}$$

5)



How many candles will 7 such candlesticks hold?

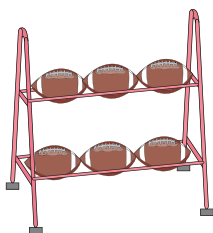
$$\underline{7 \times 8 = 56}$$



How many roses will 7 such vases hold?

$$\underline{7 \times 12 = 84}$$

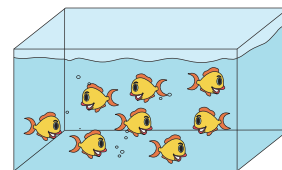
7)



How many rugby balls will 3 such stands hold?

$$\underline{6 \times 3 = 18}$$

8)



How many fish will 4 such aquariums hold?

$$\underline{8 \times 4 = 32}$$