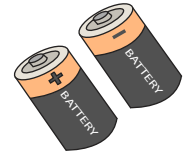


Name : \_\_\_\_\_

## Single Digit Multiplication

Sheet 1

- 1) A flashlight requires 2 batteries to function. How many batteries in all would 7 such flashlights require?



\_\_\_\_\_

- 2) A CD contains 4 music tracks. How many music tracks would 8 such CDs contain?




\_\_\_\_\_

- 3) A rectangle is 5 inches wide and 3 inches high. What is the area of the rectangle? (Area of a rectangle = length  $\times$  width)

Gain complete access to the largest collection of worksheets in all subjects!


Members, please log in to download this worksheet.

Not a member? Please sign up to gain complete access.



\_\_\_\_\_

- 4) Norah uses an ounce of butter to make 10 cookies. How many cookies can she bake with 8 ounces of butter?



\_\_\_\_\_

- 5) A tour operator owns a small fleet of 8 cars of the same make. Each car is filled with 2 liters of engine oil. How many liters in all have been filled in the cars?



\_\_\_\_\_