


Name : _____

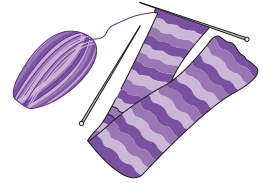
Single Digit Multiplication

Sheet 2

- 1) There are 8 friends grabbing a bite at a restaurant. They pick a snack tray each, and it costs \$9 per tray. How much will their bill total?




- 2) Martha uses 3 balls of yarn to knit a scarf. How many balls of yarn would she require to knit 9 scarves?



- 3) Rhea arranges flowers for a vase. How many vases would she require for the flowers?

Gain complete access to the largest collection of worksheets in all subjects!

vases would she




- 4) Verona plants 3 saplings in the next row. How many saplings will she have in total?

Members, please log in to download this worksheet.

Not a member? Please sign up to gain complete access.

saplings will she have

www.mathworksheets4kids.com



- 5) David walks 3 miles on average in an hour. How many miles can he walk in 3 hours?