

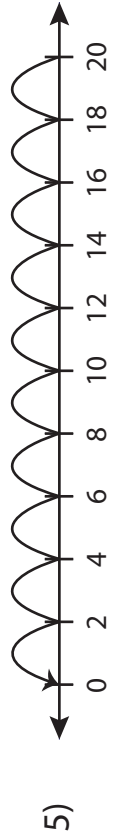
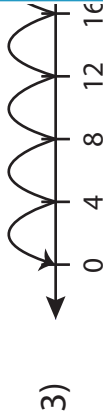
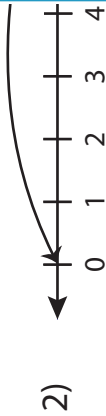
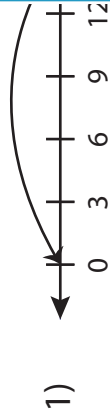
Name : \_\_\_\_\_

Score : \_\_\_\_\_

# Number Line Vs Division Sentence

Sheet 5

Match each number line to its equivalent division sentence.



$$7 \div 7 = 1$$

$$30 \div 15 = 2$$

$$30 \div 6 = 5$$

$$20 \div 2 = 10$$

$$20 \div 4 = 5$$

# PREVIEW

Gain complete access to the largest collection of worksheets in all subjects!

Members, please log in to download this worksheet.

Not a member? Please sign up to gain complete access.

[www.mathworksheets4kids.com](http://www.mathworksheets4kids.com)