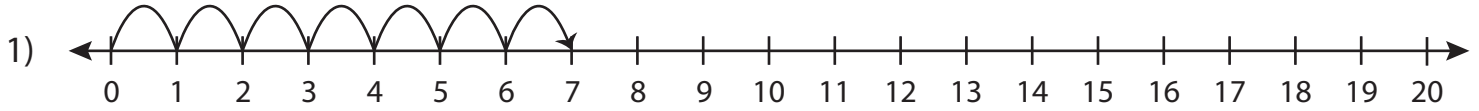


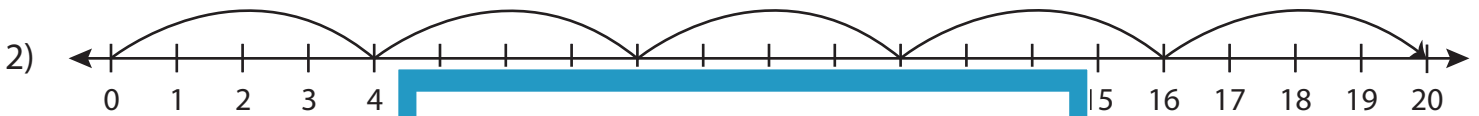
## Multiplication Sentence - Missing Numbers

T1S2

Complete the multiplication sentence that describes each model.



$$\underline{\quad\quad} \times 1 = 7$$



5

# PREVIEW

Gain complete access to the largest  
collection of worksheets in all subjects!

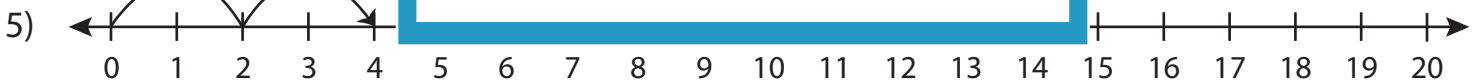
Members, please  
log in to  
download this  
worksheet.

Not a member?  
Please sign up to  
gain complete  
access.

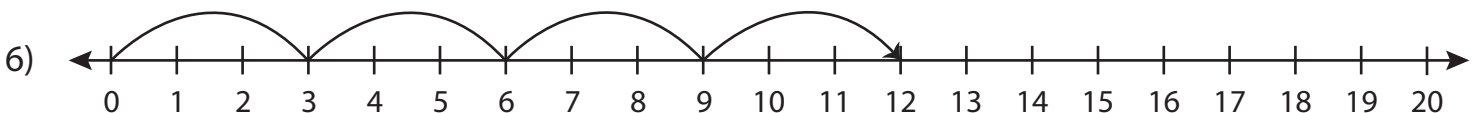
[www.mathworksheets4kids.com](http://www.mathworksheets4kids.com)



3



$$2 \times \underline{\quad\quad} = 4$$



$$\underline{\quad\quad} \times 3 = 12$$