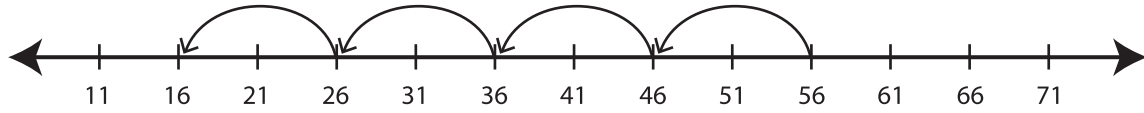


## Recognizing Pattern

ES3

Describe the pattern followed by the hops in each number line.

1)



**Start at 56. Subtract 10 each time.**

---

2)



\_\_\_\_\_

\_\_\_\_\_

3)



\_\_\_\_\_

\_\_\_\_\_

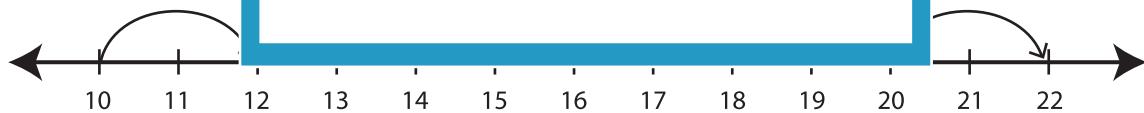
4)



\_\_\_\_\_

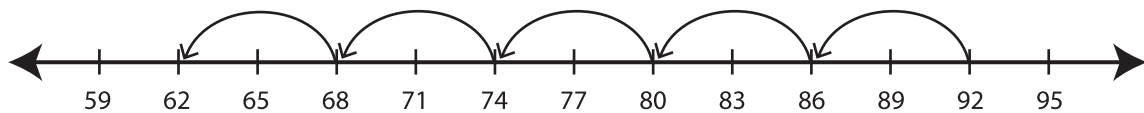
\_\_\_\_\_

5)



\_\_\_\_\_

6)



\_\_\_\_\_

# PREVIEW

Gain complete access to the largest collection of worksheets in all subjects!

Members, please log in to download this worksheet.

Not a member? Please sign up to gain complete access.

[www.mathworksheets4kids.com](http://www.mathworksheets4kids.com)