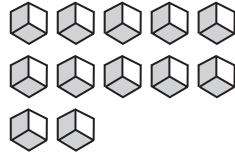
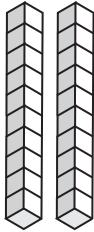


**Place Value Blocks - 2 Digits**

L2S3

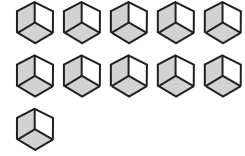
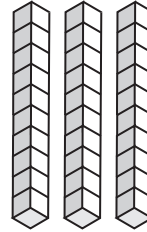
Write the number formed by base ten blocks.

1)



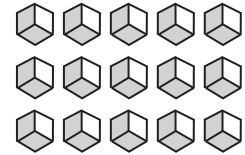

\_\_\_\_\_

2)



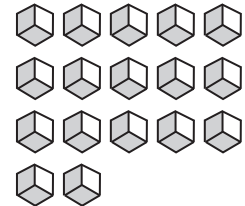
\_\_\_\_\_

3)



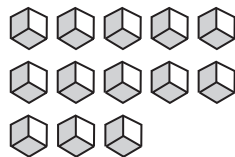
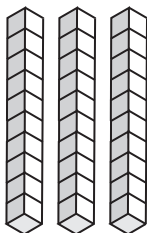
\_\_\_\_\_

5)



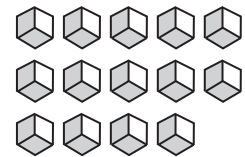
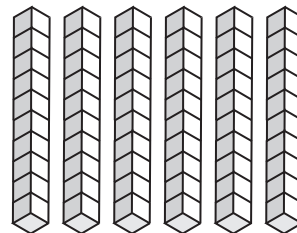
\_\_\_\_\_

7)



\_\_\_\_\_

8)



\_\_\_\_\_

**PREVIEW**

Gain complete access to the largest collection of worksheets in all subjects!

Members, please log in to download this worksheet.

Not a member? Please sign up to gain complete access.

[www.mathworksheets4kids.com](http://www.mathworksheets4kids.com)