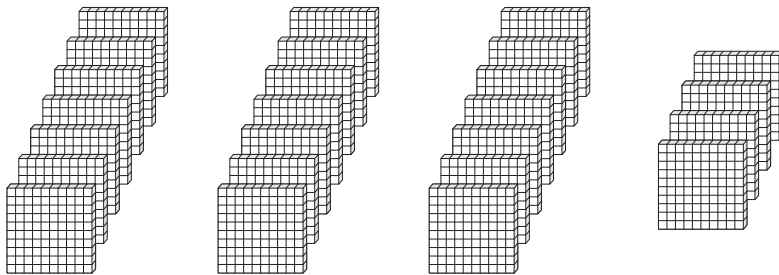


Thousands & Hundreds

How many thousands can you form? Also find the hundreds that left over.

1)



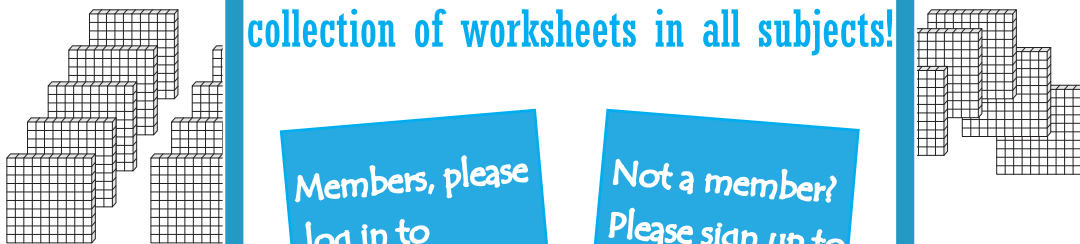
_____ thousands _____ hundreds

2)




_____ thousands _____ hundreds

3)



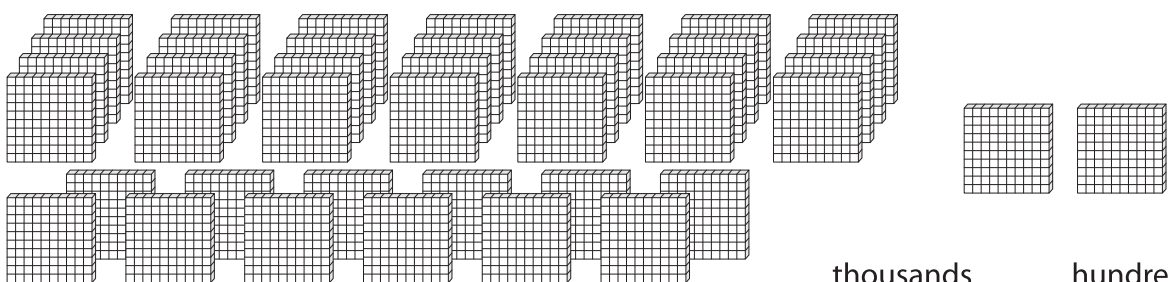
_____ thousands _____ hundreds

4)



_____ thousands _____ hundreds

5)



_____ thousands _____ hundreds

PREVIEW

Gain complete access to the largest collection of worksheets in all subjects!

Members, please log in to download this worksheet.

Not a member? Please sign up to gain complete access.

www.mathworksheets4kids.com