




Name : _____

Match Kittens to Cats


Level 1: S3

Round the numbers on the kittens to the nearest ten and help them to find their mom.




PREVIEW

Gain complete access to the largest collection of worksheets in all subjects!



Members, please log in to download this worksheet.

Not a member? Please sign up to gain complete access.



www.mathworksheets4kids.com

